


World Geography Booklet

Social Studies 8



Name: _____

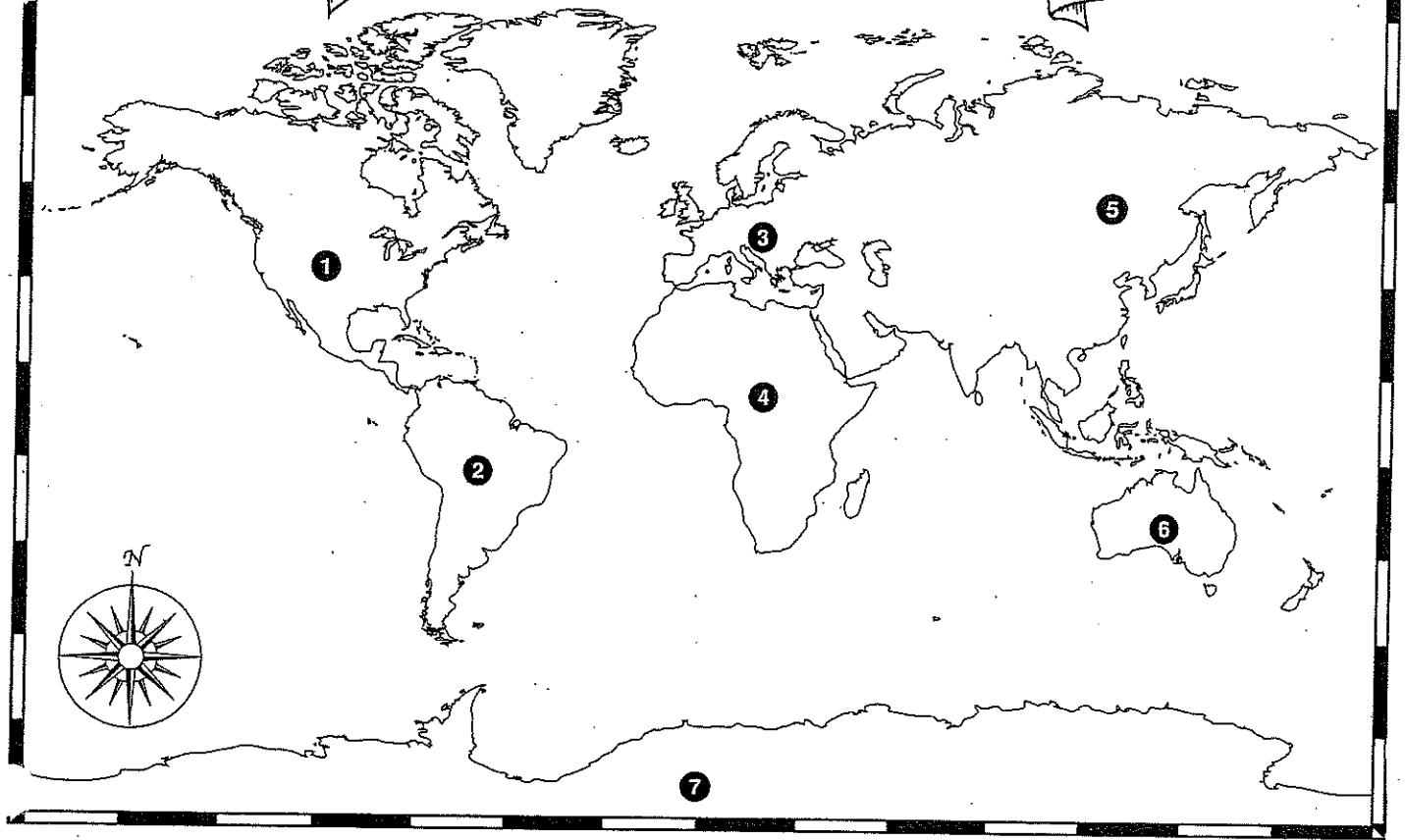
Date: _____

Block: _____

Miss Carey

Name _____

Continents of the World



1. _____
2. _____
3. _____
4. _____
5. _____
6. _____
7. _____

CONTINENT QUESTIONS:

Please answer the following questions on the spaces provided. Use pages 91-92 of your Atlas to help find the answers.

1. Which Continent is the Himalaya Mountain Range found in?

2. Which Continent is the Andes Mountain Range found in?

3. Which Continent has the Great Lakes?



4. Which Continent has the Kalahari Desert?

5. Which Continent is Madagascar part of?

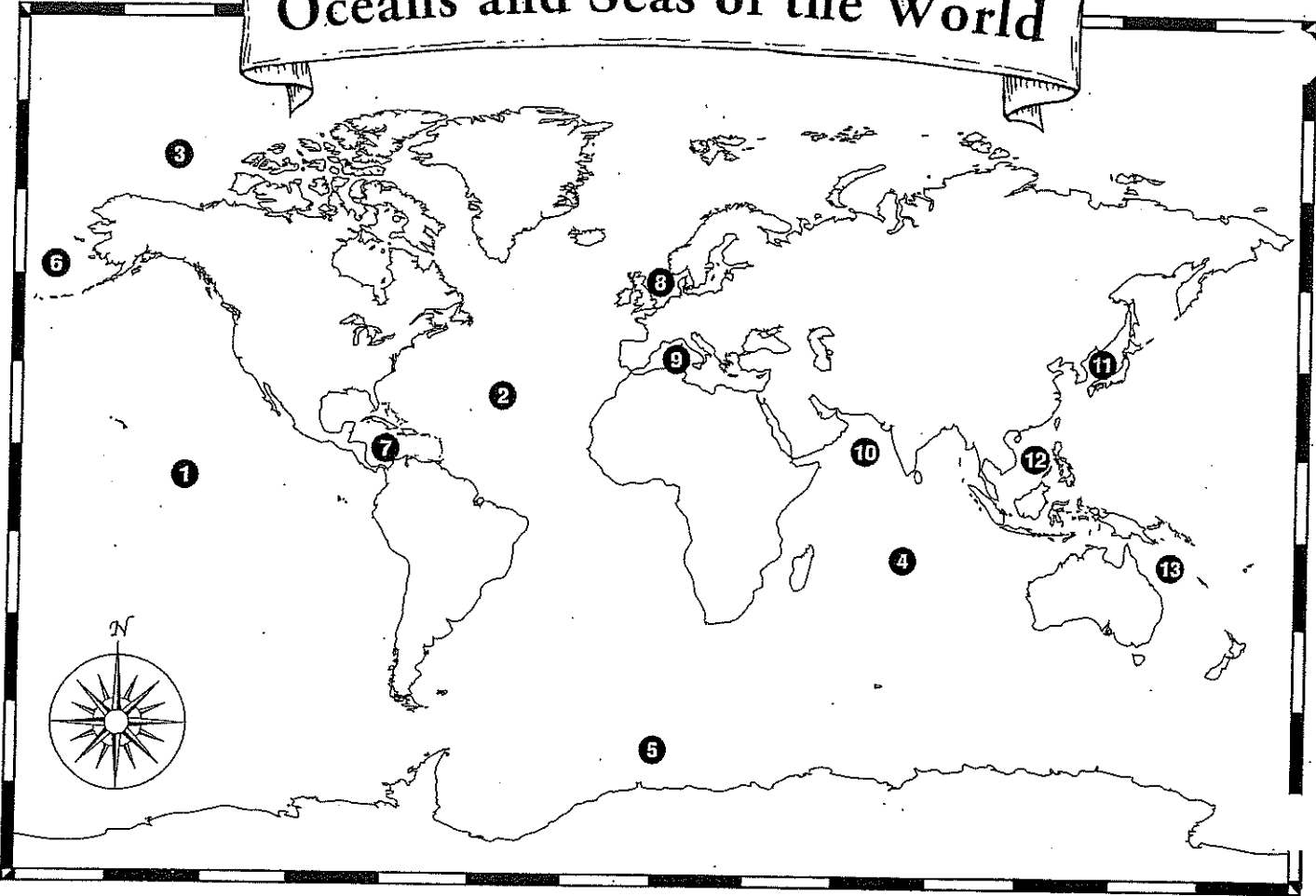
6. Which Continent are the Pyrenees Mountains found in?

7. Which Continent has the Rocky Mountain Range?

8. Which Continent has the Amazon Rain Forest?

9. What is considered to be the largest island in the world that is also a Continent?

Oceans and Seas of the World



Oceans

Seas

- 1. _____
- 2. _____
- 3. _____
- 4. _____
- 5. Southern Ocean
or Antarctic

- 6. _____
- 7. _____
- 8. _____
- 9. _____
- 10. _____
- 11. Sea of Japan
- 12. _____
- 13. _____

Oceans and Seas Questions

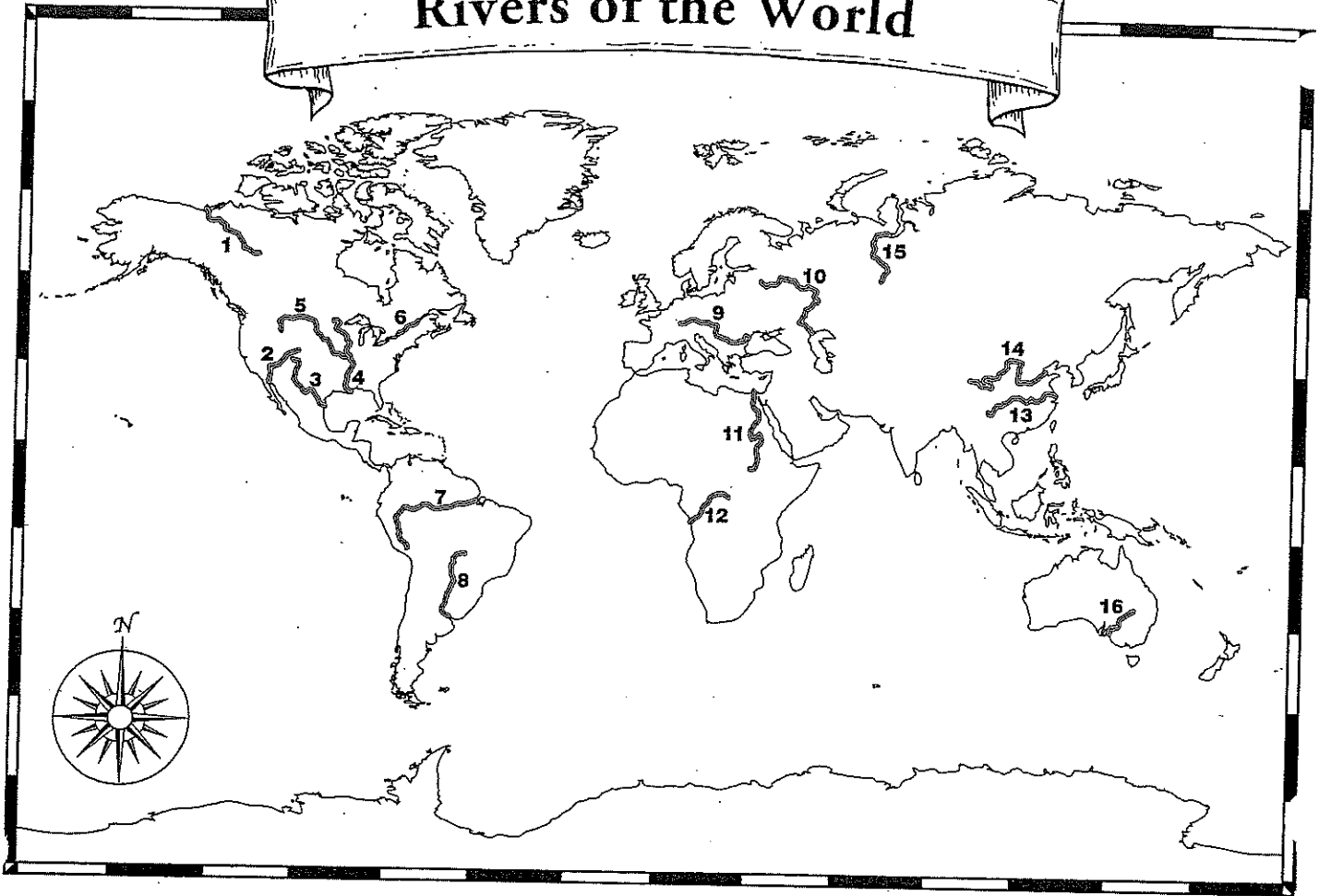
Please use p. 91-92 AND p.97-98 of your Atlas to answer the following questions:

1. What is the largest ocean?
2. What is the largest saltwater lake in the world?
3. What ocean is Hawaii located in?
4. What is considered to be the largest sea in the world?
5. What ocean is Sri Lanka located in?
6. What ocean is the Falkland Islands located in?
7. What ocean is the Galapagos located in?
8. What ocean is Papa New Guinea located in?



Name _____

Rivers of the World




- | | |
|-----------------------------|--------------------|
| _____ Amazon | _____ Mississippi |
| _____ Chang Jiang (Yangtze) | _____ Missouri |
| _____ Colorado | _____ Nile |
| _____ Congo | _____ Ob |
| _____ Danube | _____ Paraná |
| _____ Darling | _____ Rio Grande |
| _____ Huang He (Yellow) | _____ St. Lawrence |
| _____ Mackenzie | _____ Volga |

Rivers of the World Questions

Please answer the following questions on the space provided. (p.91-92)

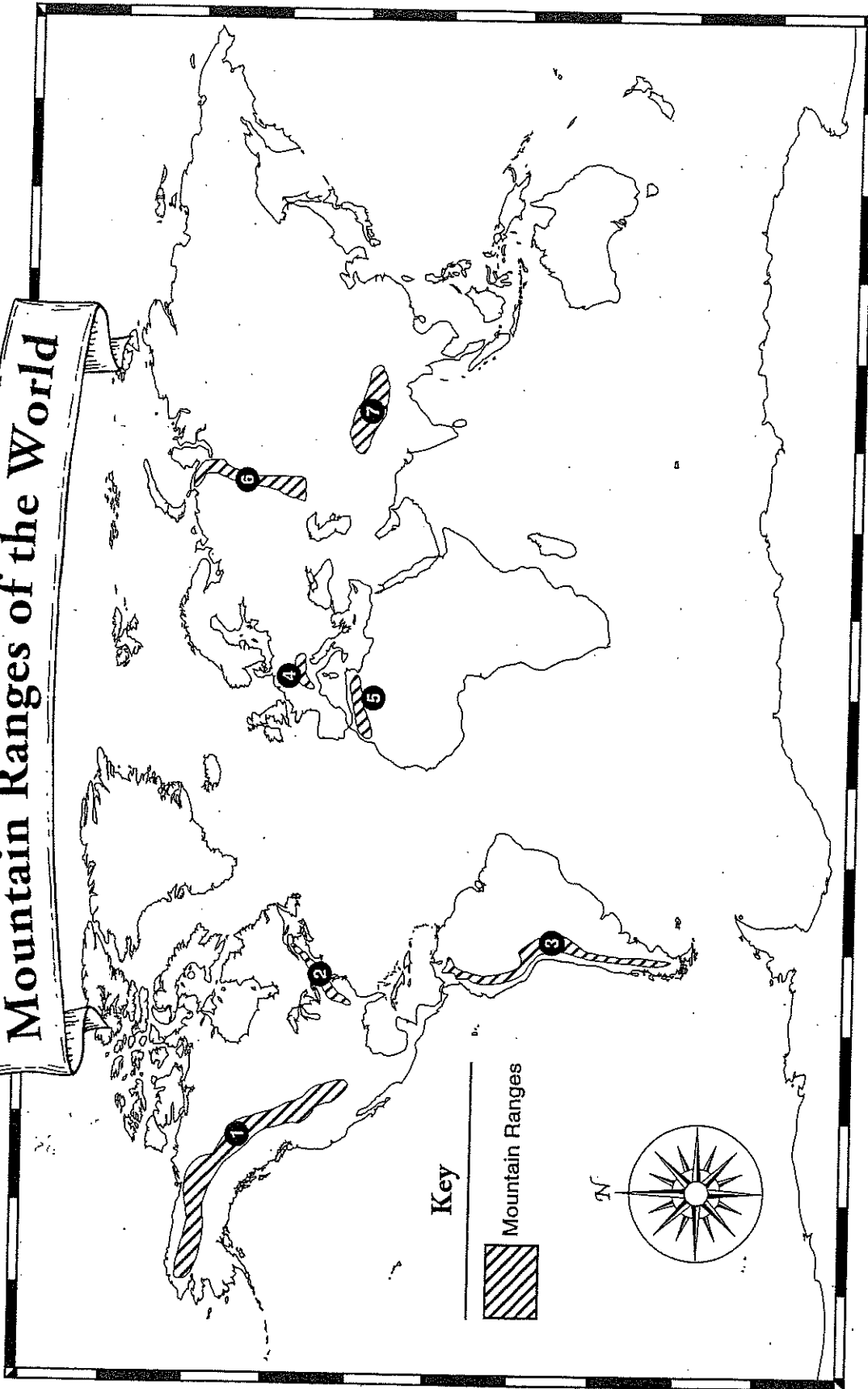
1. What is the longest river in the world?
2. What is the only river that runs South to North on the planet?
3. What river is the largest in South America?
4. What river is the largest in British Columbia?
5. What river is the largest in Eastern Canada?



Name _____

Name _____

Mountain Ranges of the World




- _____ Alps
- _____ Atlas Mountains
- _____ Ural Mountains
- _____ Andes Mountains
- _____ Himalayas
- _____ Appalachian Mountains
- _____ Rocky Mountains

Mountain Ranges

Please use p.91-92 to answer the following questions.

1. Which mountain range is the highest in the world?



2. Which mountain range runs through Peru and Chile?

3. Which mountain range is on the East Coast of Australia?

4. Where in the world are the Atlas Mountain Range?

5. Where are the Drakensburg Mountain range located?

6. What continent is the Ural Mountains located?

7. What country are the Sierra Madre Mountain range located in?